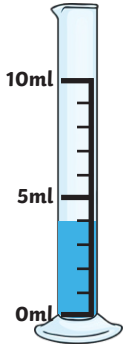


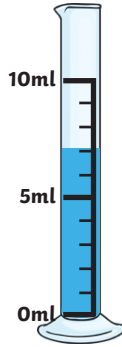
Measuring Volume

Aim: I can measure volume.

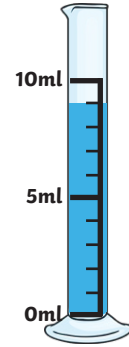
How much water is there in each jug?



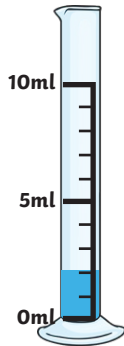
1. _____ ml



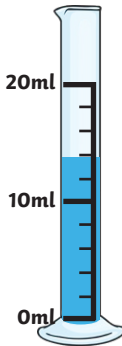
2. _____ ml



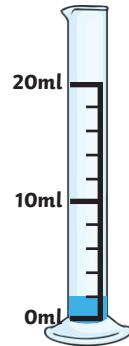
3. _____ ml



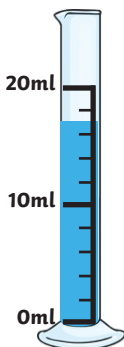
4. _____ ml



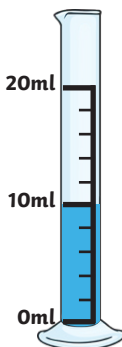
5. _____ ml



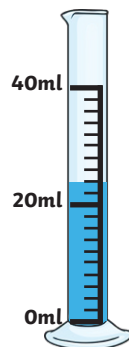
6. _____ ml



7. _____ ml



8. _____ ml

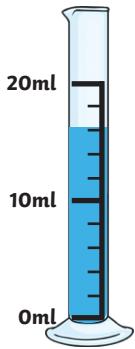


9. _____ ml

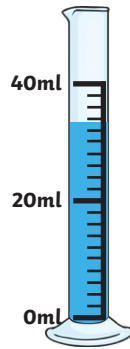
Measuring Volume

Aim: I can measure volume.

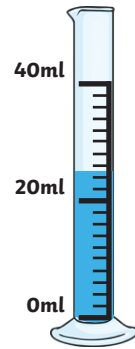
How much water is there in each jug?



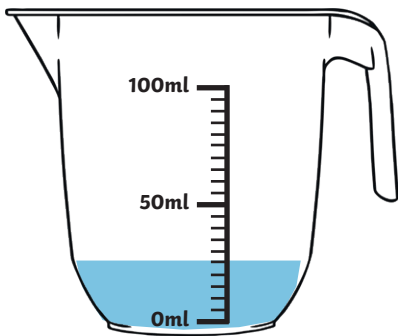
1. _____ ml



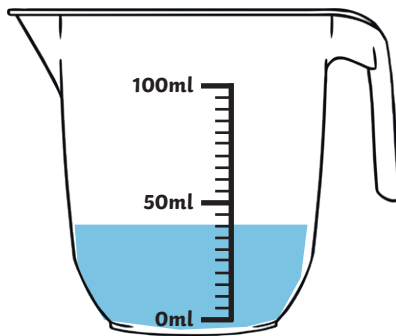
2. _____ ml



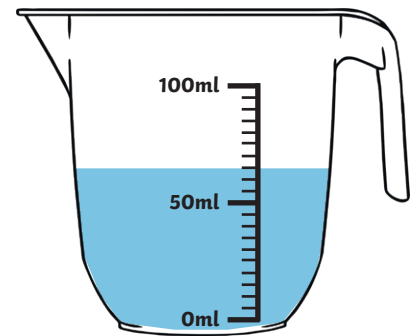
3. _____ ml



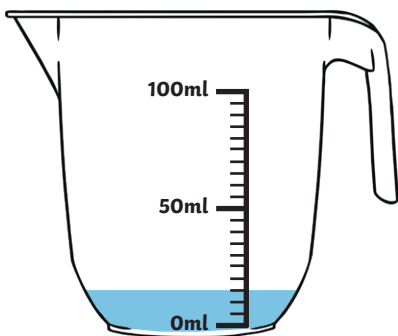
4. _____ ml



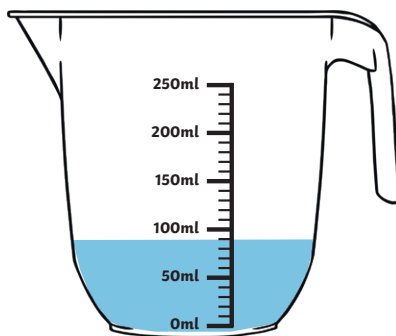
5. _____ ml



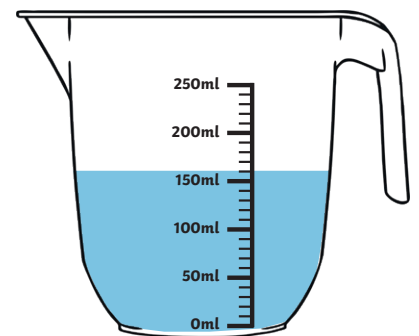
6. _____ ml



7. _____ ml



8. _____ ml

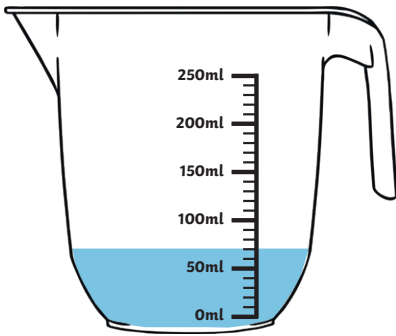


9. _____ ml

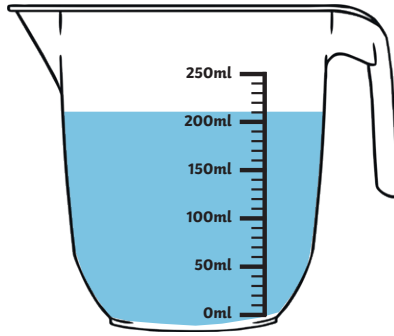
Measuring Volume

Aim: I can measure volume.

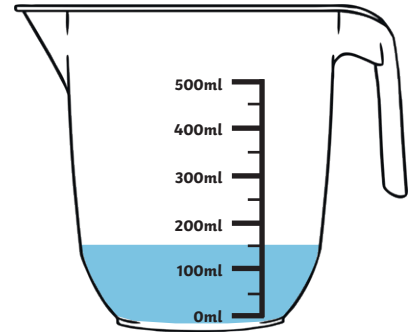
How much water is there in each jug?



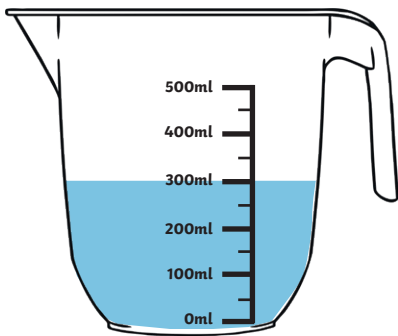
1. _____ ml



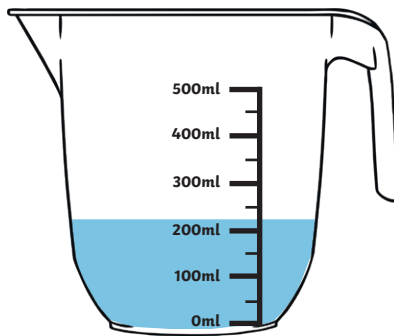
2. _____ ml



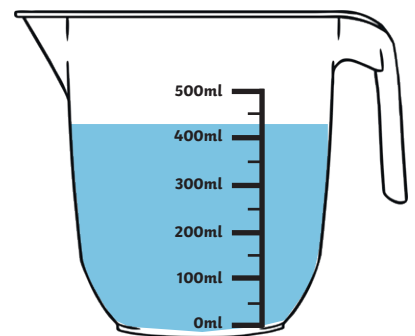
3. _____ ml



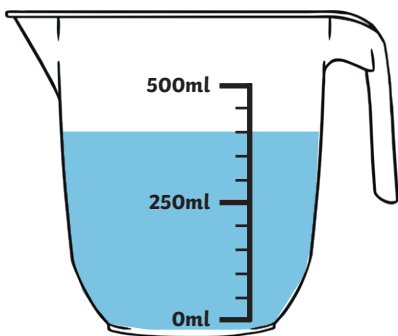
4. _____ ml



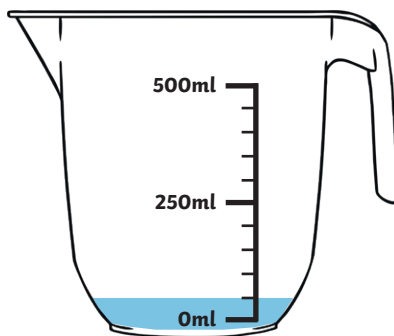
5. _____ ml



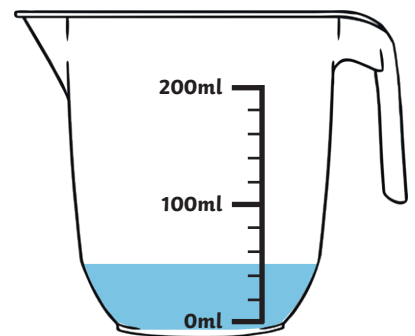
6. _____ ml



7. _____ ml



8. _____ ml



9. _____ ml

Measuring Volume Answers

★	★★	★★★
1. 4ml	1. 16ml	1. 70ml
2. 7ml	2. 26ml	2. 210ml
3. 9ml	3. 33ml	3. 150ml
4. 2ml	4. 25ml	4. 300ml
5. 14ml	5. 40ml	5. 225ml
6. 2ml	6. 65ml	6. 425ml
7. 17ml	7. 15ml	7. 400ml
8. 10ml	8. 90ml	8. 50ml
9. 24ml	9. 160ml	9. 50ml

Measuring Volume Answers



1. **4ml**
2. **7ml**
3. **9ml**
4. **2ml**
5. **14ml**
6. **2ml**
7. **17ml**
8. **10ml**
9. **24ml**

Measuring Volume Answers

★★

1. **16ml**
2. **26ml**
3. **33ml**
4. **25ml**
5. **40ml**
6. **65ml**
7. **15ml**
8. **90ml**
9. **160ml**

Measuring Volume Answers

★ ★ ★

1. **70ml**
2. **210ml**
3. **150ml**
4. **300ml**
5. **225ml**
6. **425ml**
7. **400ml**
8. **50ml**
9. **50ml**